

Evaluation - Comparing Transition Graphs

All descriptions and instructions are given verbally. Please answer all questions in English.

Radial Transition Graph View

Comparison List View

■ Apple
 ■ Banana
 ■ Grape
 ■ Strawberry
 ○ incoming
 ● outgoing



Heather
Fruit Salad
35.8s



Max
Fruit Salad
25.8s



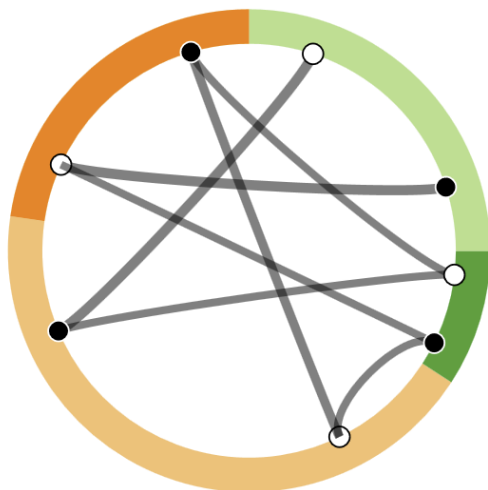
Jane
Fruit Salad
20.7s



John
Fruit Salad
45.9s

Radial Transition Graph View

■ Apple
 ■ Banana
 ■ Grape
 ■ Strawberry
 ● outgoing
 ○ incoming



● Transition Slider ○ Time Slider
■ Jane Fruit Salad 20.7s

1. Please analyze your data using the comparison list view and radial transition graph view and report your findings in detail.

.....

.....

.....

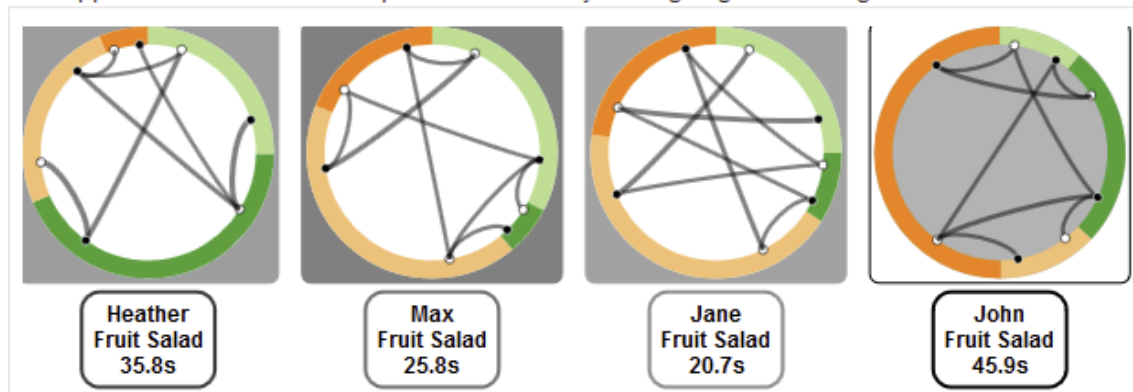
.....

.....

Transition Graph Diff View

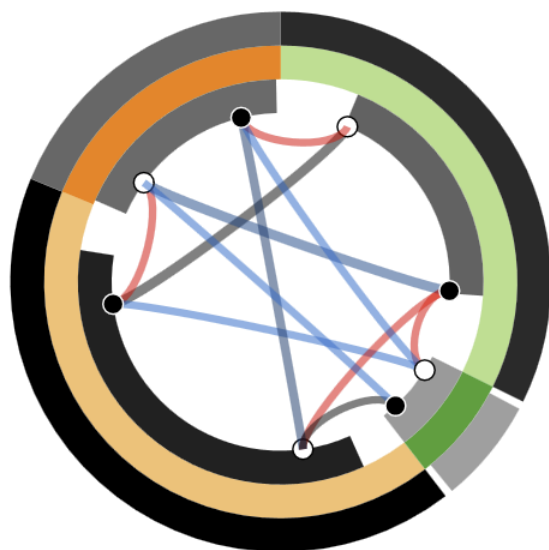
Comparison List View with Similarity

■ Apple
 ■ Banana
 ■ Grape
 ■ Strawberry
 • outgoing
 ◦ incoming

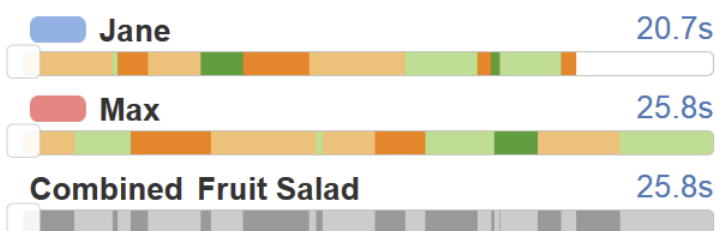


Transition Graph Diff View

■ Apple
 ■ Banana
 ■ Grape
 ■ Strawberry
 • outgoing
 ◦ incoming



● Transition Slider
 ◦ Time Slider



2. Please analyze your data using the comparison list view with similarities and transition graph diff view and report your findings in detail.

.....

.....

.....

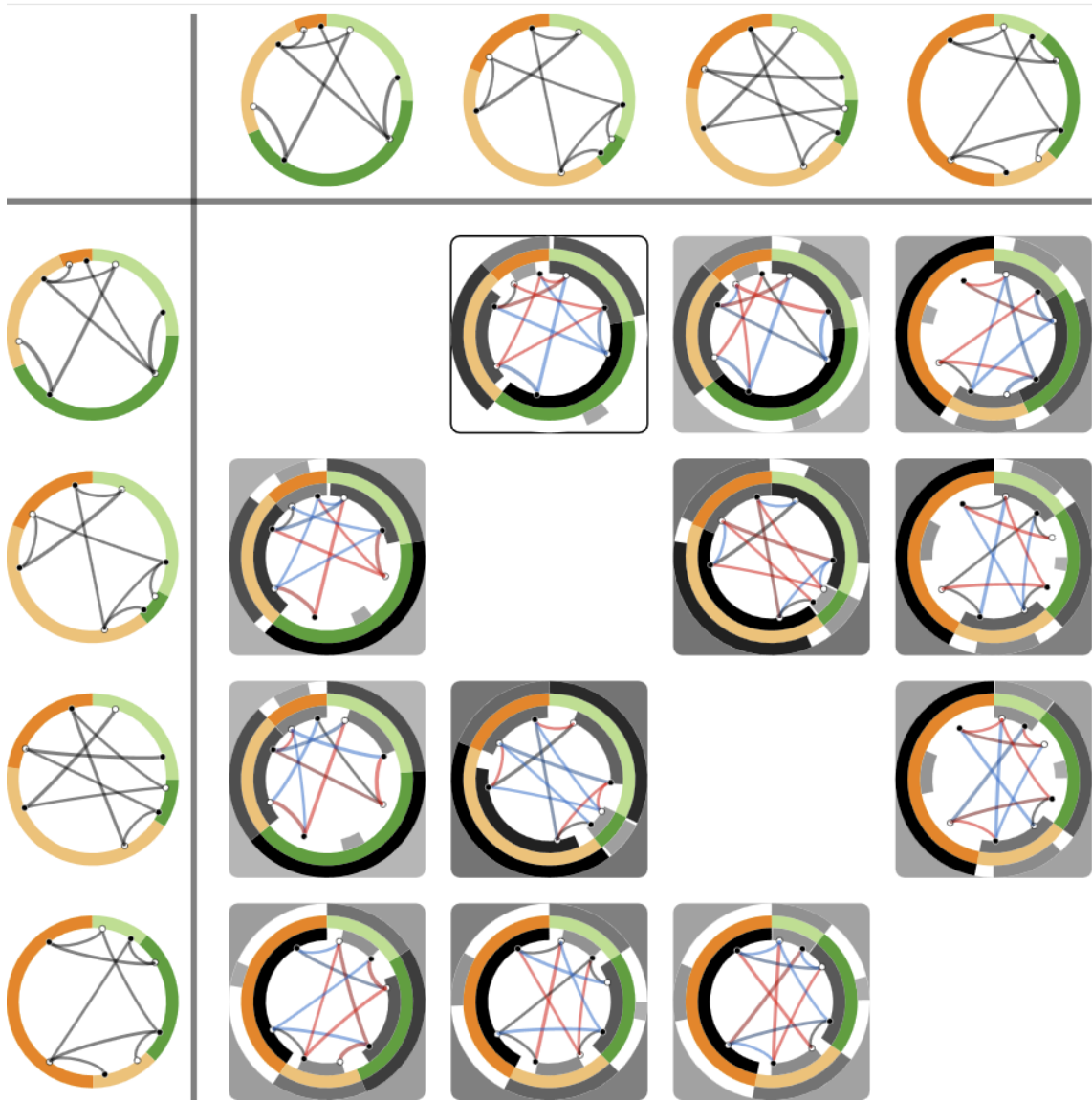
.....

.....

Comparison Grid View

Comparison Grid View

■ Apple
 ■ Banana
 ■ Grape
 ■ Strawberry
 ○ incoming
 ● outgoing



3. Please analyze your data using the comparison grid view and report your findings in detail.

.....

.....

.....

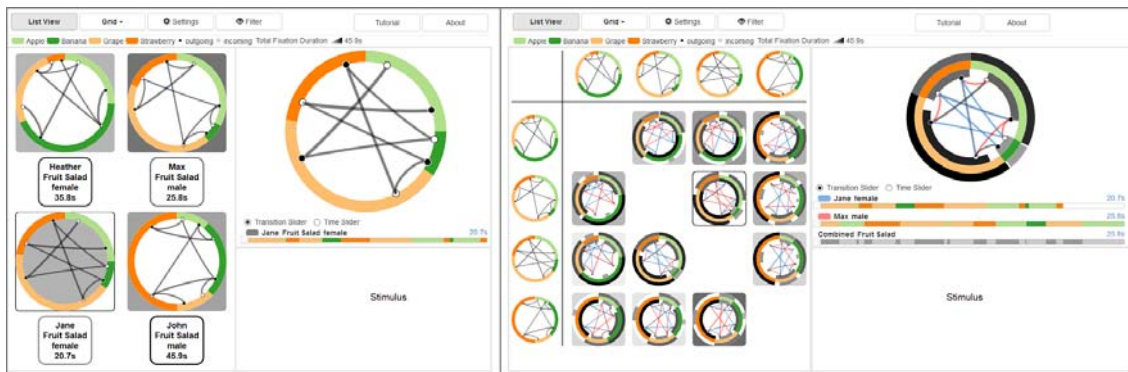
.....

.....

Discussion

Please answer all questions in as much detail as possible.

System Overview



4. Were all comments of the first study addressed? If not, which are still missing?

.....

.....

.....

.....

.....

5. Good about this revised version is...

.....

.....

.....

.....

.....

6. Poor about this revised version is...

.....

.....

.....

.....

.....

7. Do you have further suggestions for improvement?

8. What do you think is a realistic and suitable use case for this approach?

Bereitgestellt von
 Google Forms